

Fractions Mat

Working towards Year 2

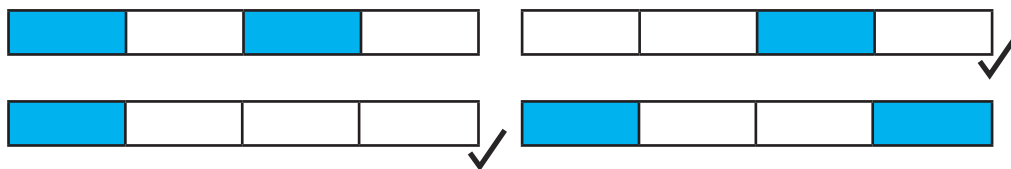
Recognise, Name and Write Fractions

Recognise, find, name and write fractions $\frac{1}{3}$, $\frac{1}{4}$ of a length, shape, set of objects or quantity

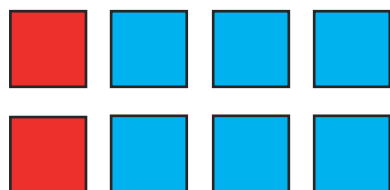
Show $\frac{1}{3}$ of a length



Which shapes have $\frac{1}{4}$ shaded?




Which colour is exactly $\frac{1}{4}$ of these squares?




red

Recognise, Name and Write Fractions

Write simple fractions, for example $\frac{1}{2}$ of 6 = 3



What is $\frac{1}{2}$ of 4?



Equivalence

Recognise the equivalence of $\frac{2}{4}$ and $\frac{1}{2}$



Fractions Mat

Expected Year 2

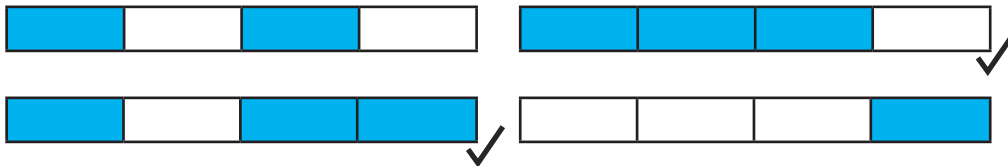
Recognise, Name and Write Fractions

Recognise, find, name and write fractions $\frac{1}{3}$, $\frac{1}{4}$, $\frac{2}{4}$ and $\frac{1}{4}$ of a length, shape, set of objects or quantity

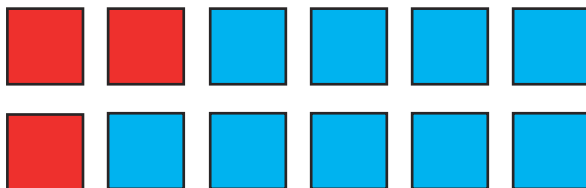
Show $\frac{1}{3}$ of a length



Which shapes have $\frac{3}{4}$ shaded?



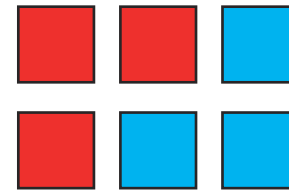
Which colour is exactly $\frac{1}{4}$ of these squares?




red

Recognise, Name and Write Fractions

Write simple fractions, for example $\frac{1}{2}$ of 6 = 3



What is $\frac{1}{2}$ of 10?



Equivalence

Recognise the equivalence of $\frac{2}{4}$ and $\frac{1}{2}$



Fractions Mat

Greater Depth Year 2

Recognise, Name and Write Fractions

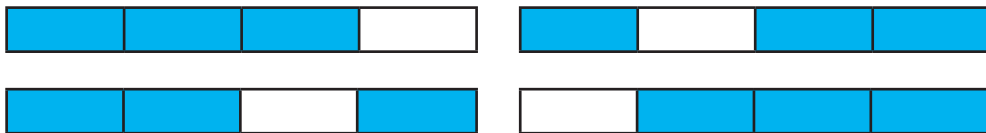
Recognise, find, name and write fractions $\frac{1}{3}$, $\frac{1}{4}$, $\frac{2}{4}$ and $\frac{1}{4}$ of a length, shape, set of objects or quantity, explaining how to use fractions when solving problems

Explain how to cut a piece of string into quarters.

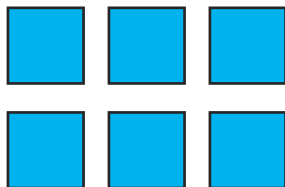


Fold the string into half, then into half again. Cut the folds.

Shade $\frac{3}{4}$ of these shapes in four different ways.




Here are $\frac{1}{3}$ of some squares. How many are there altogether?



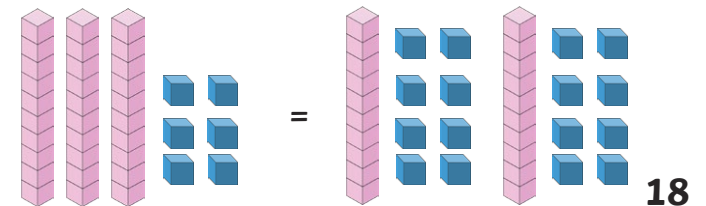
18

Recognise, Name and Write Fractions

Write simple fractions, for example $\frac{1}{2}$ of 6 = 3



What is $\frac{1}{2}$ of 36?



Equivalence

Recognise the equivalence of $\frac{2}{4}$ and $\frac{1}{2}$

